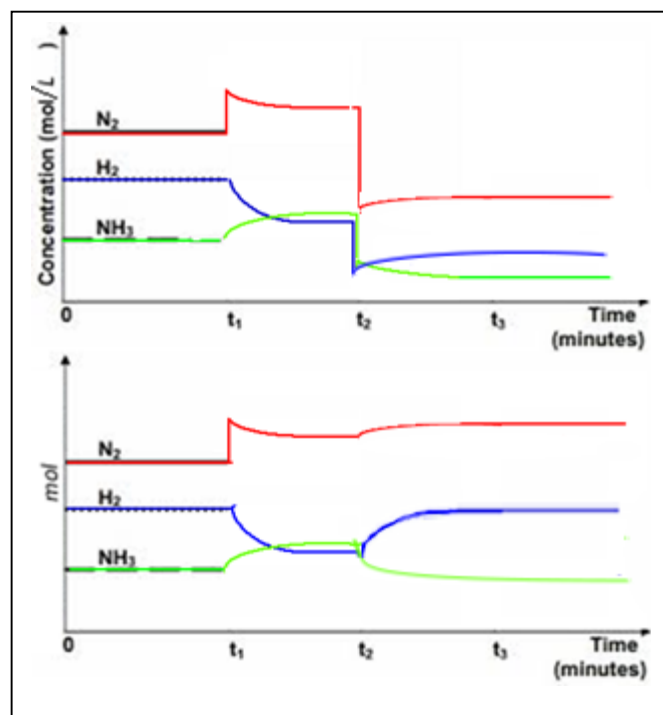


## Revision 4

- 1) The following reaction is at equilibrium in a sealed container as shown by the two graphs on the right representing concentration and mol.

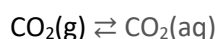


- a) On each graph sketch the change that would occur and how the system would move to partially undo the change if:
- $\text{N}_2$  was added to the system at  $t_1$  and equilibrium was reached before  $t_2$ .
  - The volume of the container was doubled at  $t_2$  and equilibrium was reached before  $t_3$ .
  - At  $t_3$  a catalyst was added to the reaction vessel.
  - At  $t_3$  a catalyst was added to the reaction vessel.

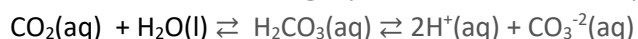


- 2) In the heat, chickens hyperventilate in order to cool down. This severely reduces the amount of carbon dioxide present in their lungs. Heat stressed chickens produce eggs with thinner and more fragile shells than chickens grown in cooler climates. This is due to a reduction in the amount of calcium carbonate deposited in the shell of hotter climate chickens.

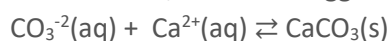
In the lungs the following equilibrium is set up between the carbon dioxide in the air and the carbon dioxide in the blood.



In the blood the following equilibrium below is set up.



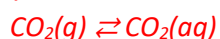
In the tissues, where the egg shell is formed, yet another equilibrium is set up.



Apply your knowledge of Le Chatelier's Principle to the following questions.

- a) Suggest why hyperventilating reduces the amount of carbon dioxide in the blood.

*Hyperventilating reduces the amount of  $\text{CO}_2(\text{g})$  in the lungs and drives the equilibrium system shown below to the left thus reducing  $\text{CO}_2(\text{aq})$  in the blood.*



- b) Explain how hyperventilating directly causes the development of thin eggshells.

*Once the  $\text{CO}_2(\text{aq})$  decreases the equilibrium labelled 1) will move in a net backward direction to partially undo the decrease in the  $\text{CO}_2$  concentration.*

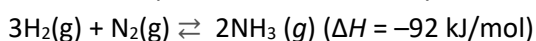
*This will cause a decrease in the  $[\text{CO}_3^{2-}]$  and drive the equilibrium labelled 2) in a net backward direction to partially undo the change. This depletes the  $\text{CaCO}_3$  available.*



- c) Providing carbonated drinking water to the chickens prevents the production of thin eggshells and restores the shells to natural state. Explain why.

*Providing carbonated drinking water increases the  $[\text{CO}_2]$  in the blood and drives all equilibriums in a net forward direction.*

- 3) Ammonia is produced commercially via the Haber process.



The industrial process is simplified in the diagram below.

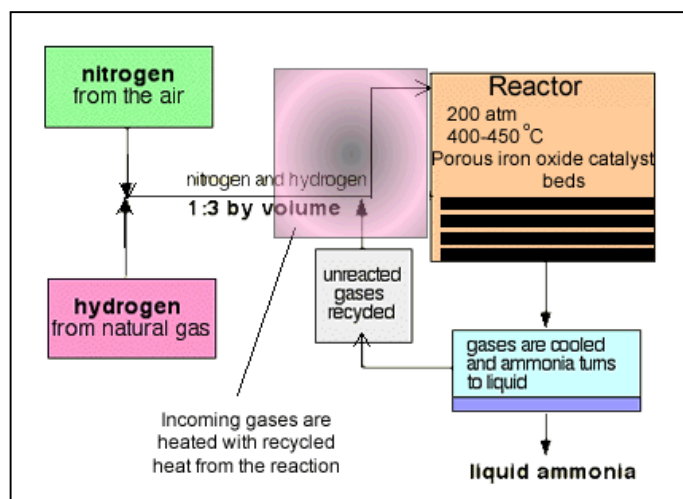
High yield and a fast rate are essential for commercial viability of this process.

- a) Describe the conditions that increase the rate of the reaction.

*-Increase rate = high temperatures and high pressure*

- b) Describe the conditions that maximise yield.

*-Increase yield = low temperatures and high pressure*



- c) Explain how the conditions for maximising yield and rate are at odds with each other.

*Low temperatures may produce high yield but decrease the rate of the reaction.*

- d) Looking at the diagram above, of the industrial process for ammonia synthesis, explain how high yield and rate are achieved at a commercial level?

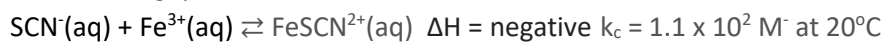
*Use of porous beds of catalysts to increase rate. Porous beds increase the surface area of the catalyst.*

*Compromise temperature of 400 °C – 450 °C*

*Pressure at 200 atm is sufficiently high to increase rate and yield without been too high and expensive to maintain.*

*Ammonia is constantly removed.*

- 4) KSCN, Fe(NO<sub>3</sub>)<sub>3</sub> and FeSCN(NO<sub>3</sub>)<sub>2</sub> were added to 2.00 litres of distilled water at 20°C in a sealed vessel and allowed to reach equilibrium. The initial concentrations of each species were 0.200M KSCN(aq) and 0.0351 M Fe(NO<sub>3</sub>)<sub>3</sub> M and 2.10 FeSCN<sup>2+</sup> M  
Given that the equilibrium constant for the reaction below at 20 °C is provided, answer the following questions.



a) After equilibrium is established

- i. Will the [SCN<sup>-</sup>] be lower, or higher than 0.200 M or remain unchanged once equilibrium is established. Explain.

*The initial value of the K<sub>c</sub> is given by the expression below.*

$$\Rightarrow \frac{[\text{FeSCN}^{2+}]}{[\text{SCN}^-][\text{Fe}^{3+}]}$$

$$\Rightarrow \frac{2.10}{(0.200 \times 0.0351)} = 299 \text{ M}^{-1}$$

*This is in excess of the K<sub>c</sub> at 20°C and so the system will move in a net backward direction hence restoring the k<sub>c</sub> value of 1.1 x 10<sup>2</sup> M<sup>-1</sup>*

*⇒ the [SCN<sup>-</sup>] will increase as the system moves in net backward reaction.*

- ii. What will the value of the equation quotient be once equilibrium is established.

*Since no temperature change the value of the reaction quotient will return to K<sub>c</sub> (1.1 x 10<sup>2</sup> M<sup>-1</sup>)*

- iii. The volume of the reaction vessel is doubled and the system is allowed to reach equilibrium once more.

- a. What happens to the [SCN<sup>-</sup>]

**increase, decrease, remain unchanged**

Explain

*Since the volume is doubled all concentrations are halved, the system will respond to partially undo the dilution of all the species by moving in a net backward direction (side of most particles). Once equilibrium is restored the overall concentration of SCN<sup>-</sup> will be lower than the initial concentration, as the change is only partially undone.*

- b. what happens to the number of mol of SCN<sup>-</sup> at this new equilibrium.

**increase, decrease, remain unchanged**

Explain

*Since the system moves in a net backward direction the amount, in mol, of SCN<sup>-</sup> will increase overall.*

- b) In another experiment conducted at 20°C it was found that the concentrations of Fe<sup>3+</sup> and SCN<sup>-</sup> were both 0.234 M.

- i. Find the [FeSCN<sup>2+</sup>].

$$\Rightarrow \frac{[\text{FeSCN}^{2+}]}{[\text{SCN}^-][\text{Fe}^{3+}]} = 111 \text{ M}^{-1}$$

$$\Rightarrow \frac{[\text{FeSCN}^{2+}]}{(0.234 \times 0.234)} = 111 \text{ M}^{-1}$$

$$\Rightarrow [\text{FeSCN}^{2+}] = 0.0548 \times 111 = 6.08 \text{ M}$$

- ii. The temperature was then increased to 100°C.

How will the [SCN<sup>-</sup>] change? **increase, decrease, remain unchanged.** Explain

*Since the reaction is endothermic the system will respond to a temperature increase by moving in a net backward direction thus partially undoing the temperature increase, the  $[\text{SCN}^-]$  will, therefore, increase.*