

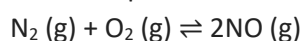
## Lesson 2 Working with equilibrium expressions and constants of homogeneous systems.

Significance of high equilibrium constant – high equilibrium constants indicate that the reaction will use up a high percentage of the reactants to produce a high amount of product. However it does not indicate the rate at which the reaction takes place..

Units of the equilibrium constant-the units of the equilibrium constant depends on the chemical equation and hence the equilibrium expression.

When the total number of moles of products, in a balanced chemical equation, is equal to the total number of moles of reactants, then K has no units.

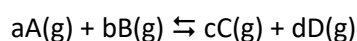
For example:



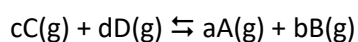
Units of concentration will cancel out in the expression shown.

$$K = \frac{[\text{NO}]^2}{[\text{N}_2][\text{O}_2]}$$

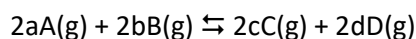
Expression dependent on equation- before an equilibrium expression can be written the balanced chemical equation has to be known. Reactants appear in the denominator and products in the numerator. Below are a few examples.



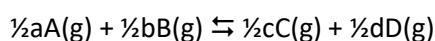
$$\frac{[\text{C}]^c [\text{D}]^d}{[\text{A}]^a [\text{B}]^b} = K_c$$



$$\frac{[\text{A}]^a [\text{B}]^b}{[\text{C}]^c [\text{D}]^d} = \frac{1}{K_c}$$

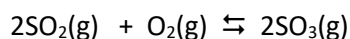


$$\frac{[\text{C}]^{2c} [\text{D}]^{2d}}{[\text{A}]^{2a} [\text{B}]^{2b}} = K_c^2$$



$$\frac{[\text{C}]^{\frac{1}{2}c} [\text{D}]^{\frac{1}{2}d}}{[\text{A}]^{\frac{1}{2}a} [\text{B}]^{\frac{1}{2}b}} = K_c^{\frac{1}{2}} = \sqrt{K_c}$$

eg1 Consider the following reaction at equilibrium.



The equilibrium constant at 1000 °K is  $2.71 \times 10^2 \text{ M}^{-1}$ .

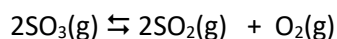
a) Write the equilibrium expression for the reaction  $2\text{SO}_2(\text{g}) + \text{O}_2(\text{g}) \rightleftharpoons 2\text{SO}_3(\text{g})$

$$\frac{[\text{SO}_3]^2}{[\text{SO}_2]^2 [\text{O}_2]} = K$$

b) Write the equilibrium expression for the reaction  $\text{SO}_2(\text{g}) + \frac{1}{2} \text{O}_2(\text{g}) \rightleftharpoons \text{SO}_3(\text{g})$

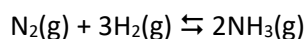
$$\frac{[\text{SO}_3]}{[\text{SO}_2] [\text{O}_2]^{1/2}} = K^{1/2}$$

c) Calculate the equilibrium constant for the reaction below at 1000°K



$$\frac{[\text{SO}_2]^2 [\text{O}_2]}{[\text{SO}_3]^2} = \frac{1}{K} = \frac{1}{271} = 3.69 \times 10^{-3} \text{ M}$$

1) A mixture of nitrogen and hydrogen gases was placed in a sealed vessel and allowed to reach equilibrium according to the equation below at a constant temperature.



When no further change to the mixture was observed the concentration of each gas present was analysed and recorded. The results are given below.

$$[\text{NH}_3] = 0.142 \text{ M}$$

$$[\text{H}_2] = 0.121 \text{ M}$$

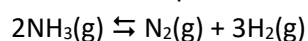
$$[\text{N}_2] = 0.101 \text{ M}$$

a) Write the equilibrium expression for the above reaction.

b) Calculate the value of the equilibrium expression

c) The temperature in the reaction vessel above was altered and the mixture was again allowed to reach equilibrium. The equilibrium constant at this new temperature is  $1.27 \times 10^4 \text{ M}^{-2}$ .

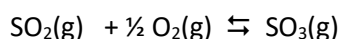
i. Write the equilibrium expression for the equation below.



ii. Calculate the equilibrium constant at this temperature for the reaction in i. above.

iii. What can you say about the yield of nitrogen and hydrogen gases at this temperature?

2) A mixture containing 2.00 mol of SO<sub>2</sub> gas and 2.00 mol of O<sub>2</sub> gas was placed in a 2.00 litre, sealed, vessel and allowed to react according to the equation below.

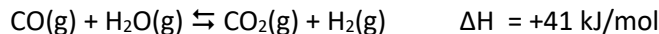


The mixture was allowed to reach equilibrium at constant temperature. At equilibrium 0.500 mol of SO<sub>3</sub> gas was present.

a) Write the equilibrium expression for the reaction.

b) Calculate the equilibrium constant for the system at the given temperature.

3) Consider the production of hydrogen gas according to the equation below.



A mixture of CO and H<sub>2</sub>O gases was placed in a 2.00 litre vessel at 225°C, a few minutes later the mixture was analysed and found to contain 2.00 mol of CO, 1.00 mol of H<sub>2</sub>O and 2.00 mol of H<sub>2</sub> gas. At 225°C the equilibrium constant for this reaction is 23.6

a) How many mol of CO<sub>2</sub> was present in the mixture at equilibrium?

b) Write the equilibrium expression for this reaction.

c) Calculate the value of the equilibrium expression.

d) Had the reaction reached equilibrium? Explain.

e) What can you say about the forward rate of reaction when compared to the backward rate of reaction? Explain

f) In another vessel, of unknown volume, a mixture of CO and H<sub>2</sub>O gases was allowed to react and reach equilibrium at 225°C. After reaching equilibrium the mixture was sampled and revealed the following concentrations, [CO] = 3.00M and [H<sub>2</sub>O] = 2.24 M. Calculate the concentration of H<sub>2</sub> gas.